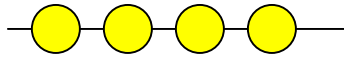
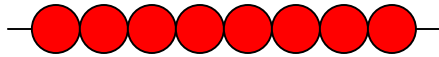


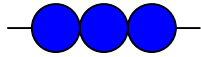
Ergänze bis zur zehn




$$\underline{4} + \underline{\quad} = \boxed{10}$$



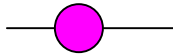
$$\underline{\quad} + \underline{\quad} = \boxed{10}$$




$$\underline{\quad} + \underline{\quad} = \boxed{10}$$



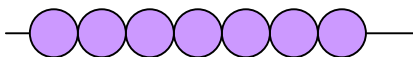
$$\underline{\quad} + \underline{\quad} = \boxed{10}$$



$$\underline{\quad} + \underline{\quad} = \boxed{10}$$



$$\underline{\quad} + \underline{\quad} = \boxed{10}$$



$$\underline{\quad} + \underline{\quad} = \boxed{10}$$



$$\underline{\quad} + \underline{\quad} = \boxed{10}$$