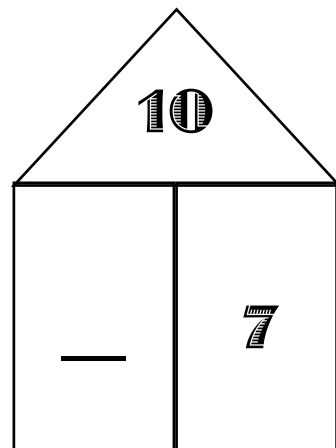
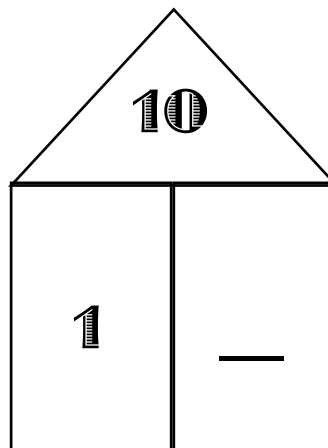
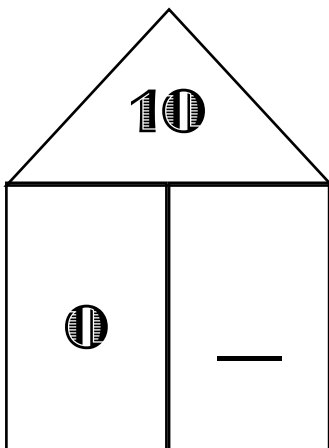
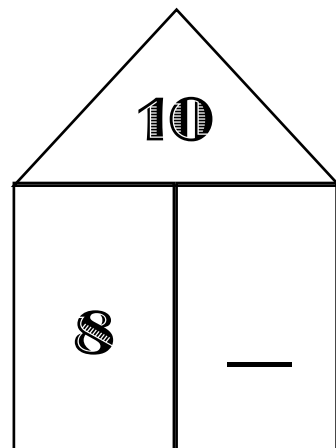
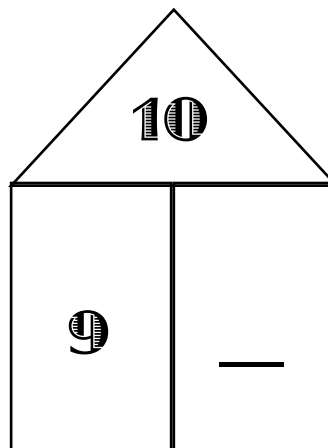
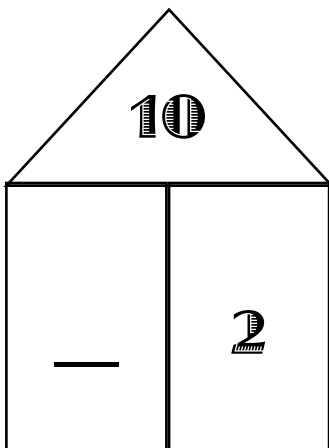
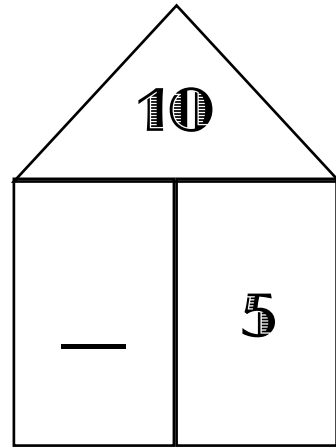
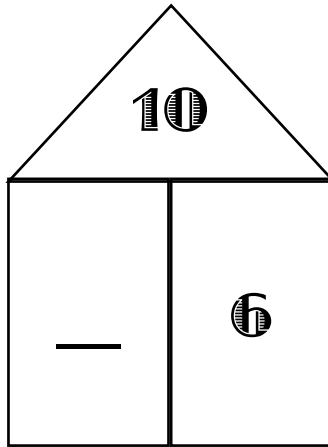
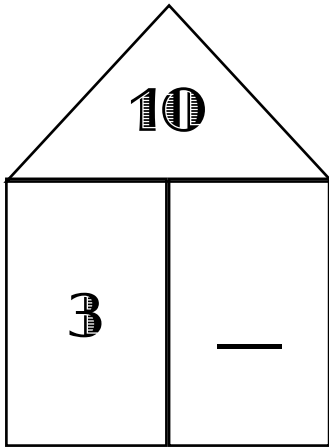


Immer 10

In den Häusern wohnen immer 10 Personen.
Ergänze die fehlenden Zahlen!




Immer minus 1

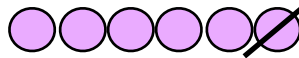
Wie viele Perlen waren es?
Trage die Zahlen ein und rechne aus!
Zeichne das Ergebnis als Perlenstange!



	-	1	=	
--	---	---	---	--




	-	1	=	
--	---	---	---	--



	-	1	=	
--	---	---	---	--



	-	1	=	
--	---	---	---	--




	-	1	=	
--	---	---	---	--




	-	1	=	
--	---	---	---	--

Immer plus 1


Wie viele Perlen siehst du?
Trage die Zahlen ein und rechne aus!
Zeichne das Ergebnis als Perlenstange!



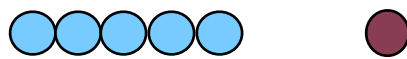
	+	1	=	
--	---	---	---	--




	+	1	=	
--	---	---	---	--




	+	1	=	
--	---	---	---	--



	+	1	=	
--	---	---	---	--



	+	1	=	
--	---	---	---	--



	+	1	=	
--	---	---	---	--