

Olympiade

Klasse 1

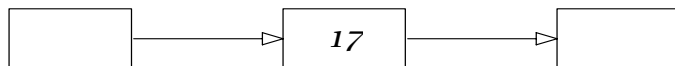
Teil 1



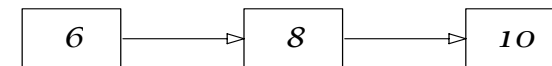
16	
13	
3	
16	
12	




Vorgänger und Nachfolger



gerade oder ungerade?



Schreibe weiter!



erstellt von Nicole Böhmer

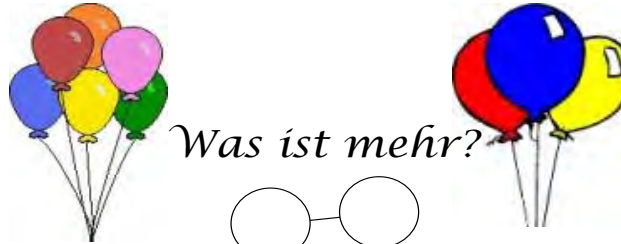
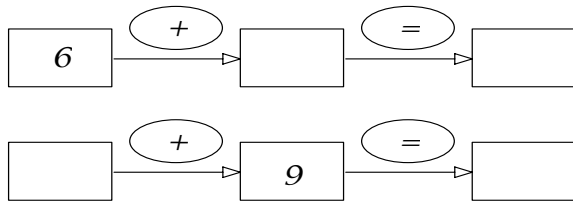


Olympiade

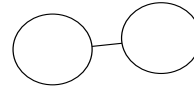
Klasse 1 Teil 2




Verdoppelt!



Was ist mehr?



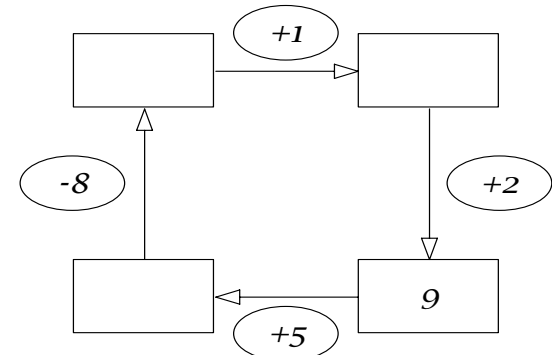
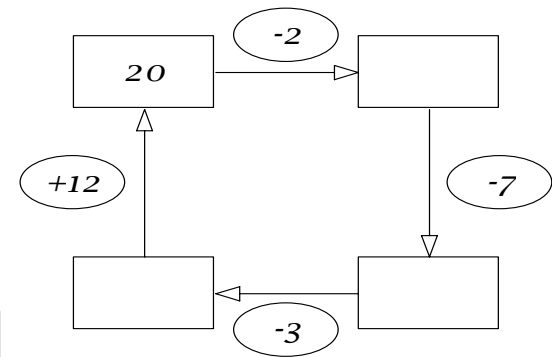
Schreibe die Rechnung!



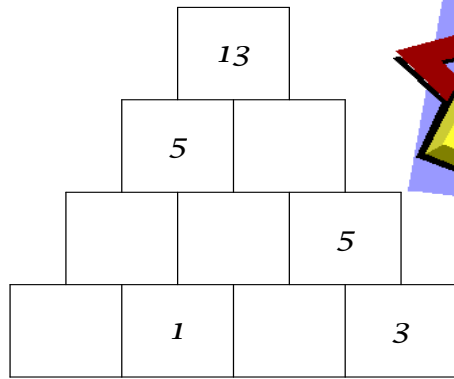
Zerlege !

15	
14	
10	
8	
7	
5	

Was passt nicht ?



erstellt von Nicole Böhmer

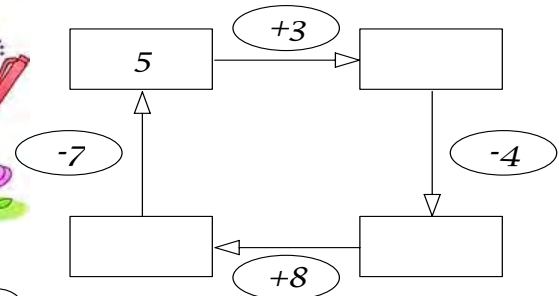
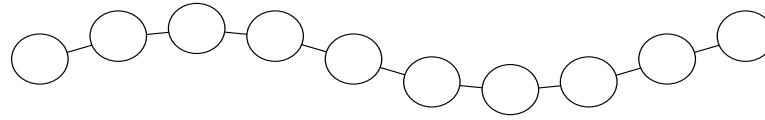


Olympiade

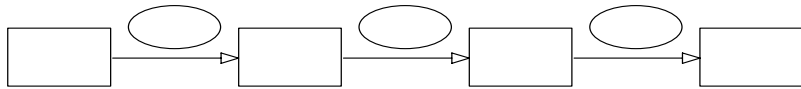
Klasse 1 Teil 3



Zeichne den 3. und 9. Kreis an!



Es sitzen 7 Leute im Bus. 3 davon steigen aus und 5 kommen neu dazu. Wieviel Leute sitzen jetzt im Bus?


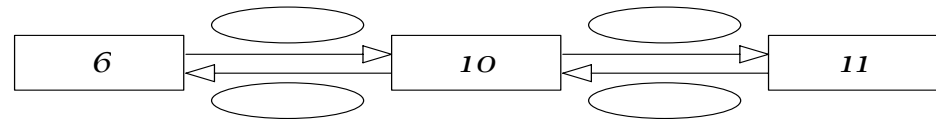


Zerlege!

18	
16	
11	
12	
9	
0	



Rechne aus!



Geschafft!

erstellt von Nicole Böhmer