
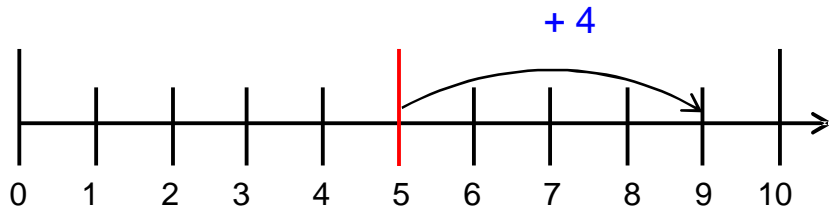


Tauschaufgaben ZR 10 mit verschiedenen Darstellungen

Ich rechne
5 + 4.





5	+	4	=	
---	---	---	---	--



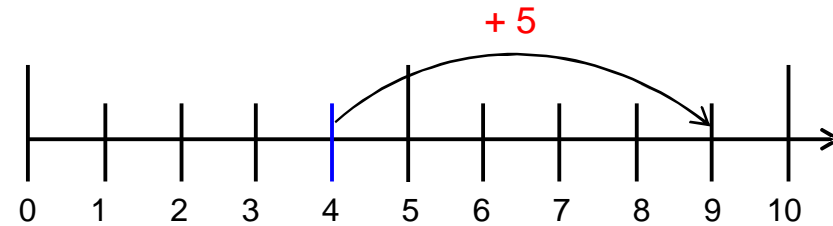
5	+	4	=	
---	---	---	---	--

4	+	5	=	
---	---	---	---	--

Ich rechne
4 + 5.



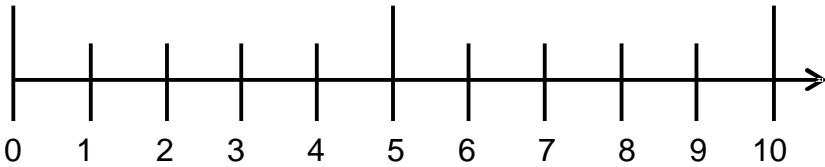

4	+	5	=	
---	---	---	---	--



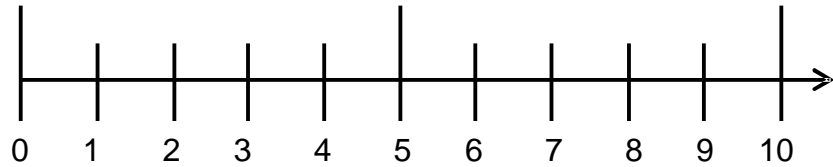
Jetzt bist du dran!



2	+	3	=	
---	---	---	---	--



3	+	2	=	
---	---	---	---	--

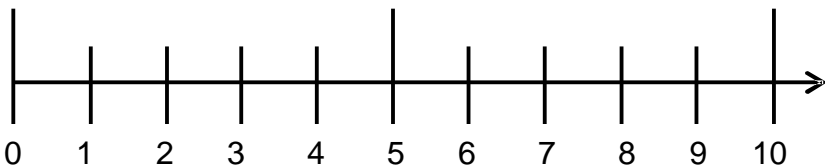


2	+	3	=	
---	---	---	---	--

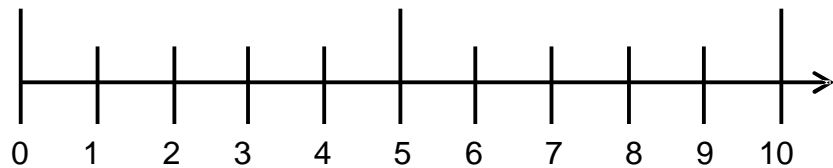
3	+	2	=	
---	---	---	---	--



3	+	4	=	
---	---	---	---	--



4	+	3	=	
---	---	---	---	--

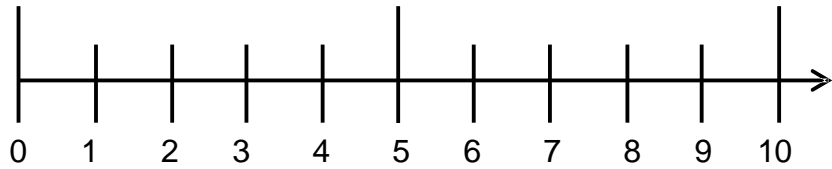


3	+	4	=	
---	---	---	---	--

4	+	3	=	
---	---	---	---	--

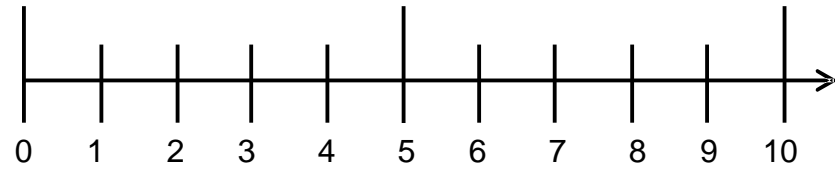
○○○○○ ○○○○

3	+	6	=	
---	---	---	---	--



○○○○○ ○○○○

6	+	3	=	
---	---	---	---	--

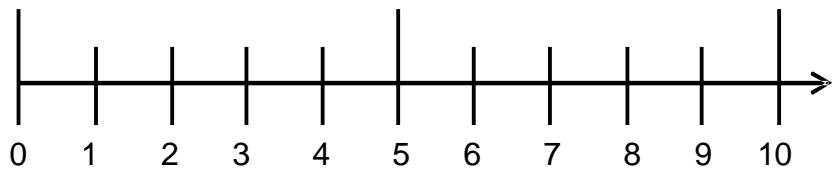


3	+	6	=	
---	---	---	---	--

6	+	3	=	
---	---	---	---	--

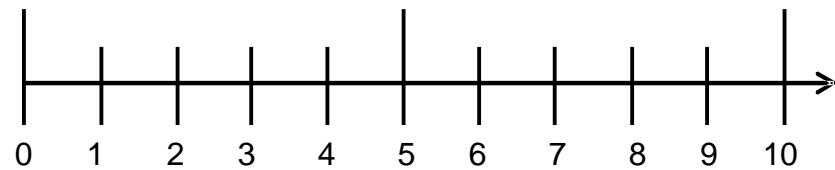
○○○○○ ○○○○

3	+	5	=	
---	---	---	---	--



○○○○○ ○○○○

5	+	3	=	
---	---	---	---	--

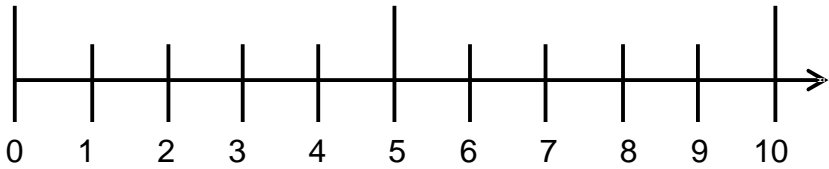


3	+	5	=	
---	---	---	---	--

5	+	3	=	
---	---	---	---	--

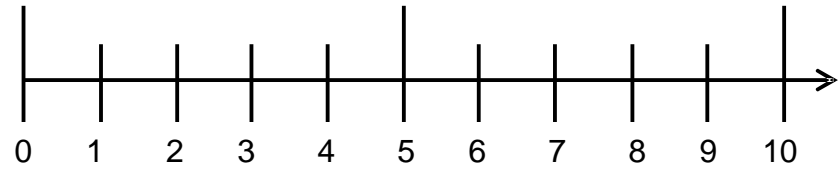
○○○○○ ○○○○

1	+	3	=	
---	---	---	---	--



○○○○○ ○○○○

3	+	1	=	
---	---	---	---	--

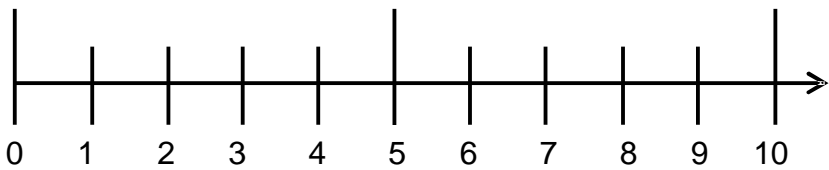


1	+	3	=	
---	---	---	---	--

3	+	1	=	
---	---	---	---	--

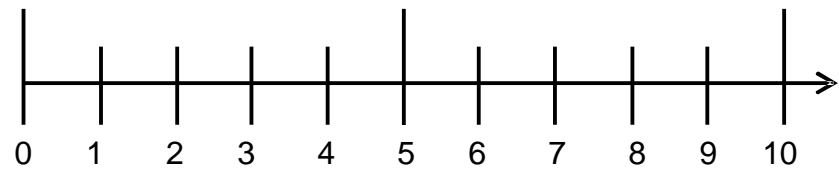
○○○○○ ○○○○

3	+	7	=		
---	---	---	---	--	--



○○○○○ ○○○○

7	+	3	=		
---	---	---	---	--	--

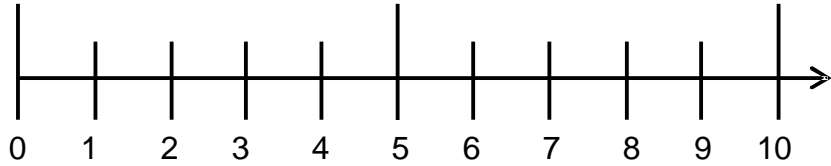


3	+	7	=		
---	---	---	---	--	--

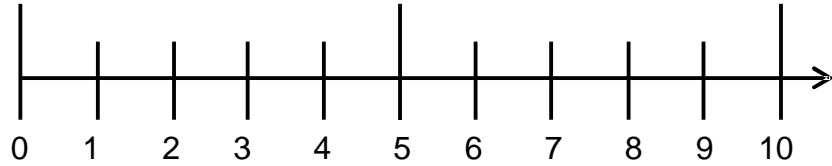
7	+	3	=		
---	---	---	---	--	--



	+		=	
--	---	--	---	--



	+		=	
--	---	--	---	--

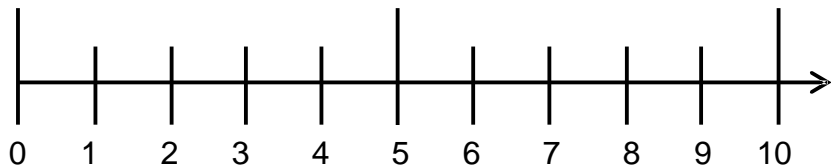


	+		=	
--	---	--	---	--

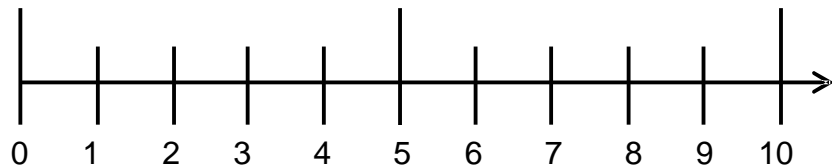
	+		=	
--	---	--	---	--



	+		=	
--	---	--	---	--



	+		=	
--	---	--	---	--



	+		=	
--	---	--	---	--

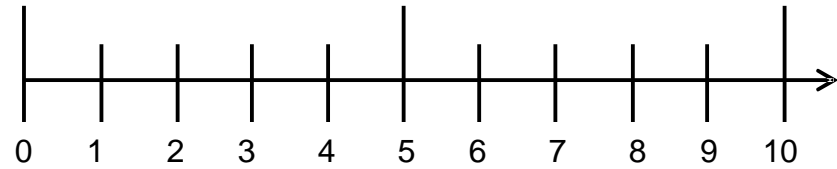
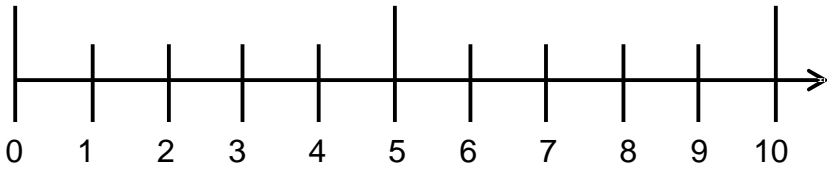
	+		=	
--	---	--	---	--



	+		=	
--	---	--	---	--



	+		=	
--	---	--	---	--



	+		=	
--	---	--	---	--

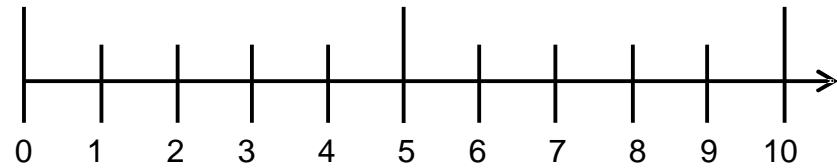
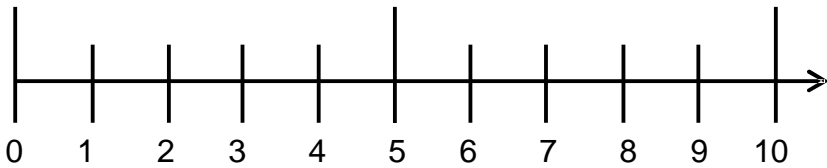
	+		=	
--	---	--	---	--



	+		=	
--	---	--	---	--



	+		=	
--	---	--	---	--



	+		=		
--	---	--	---	--	--

	+		=		
--	---	--	---	--	--