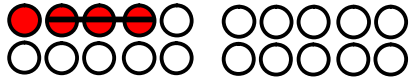


# Subtrahieren bis 20 - „Zwergen- und Riesenaufgaben“



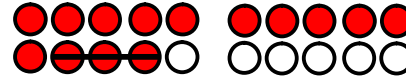
$$\begin{array}{|c|c|c|c|} \hline 4 & - & 3 & = & 1 \\ \hline \end{array}$$



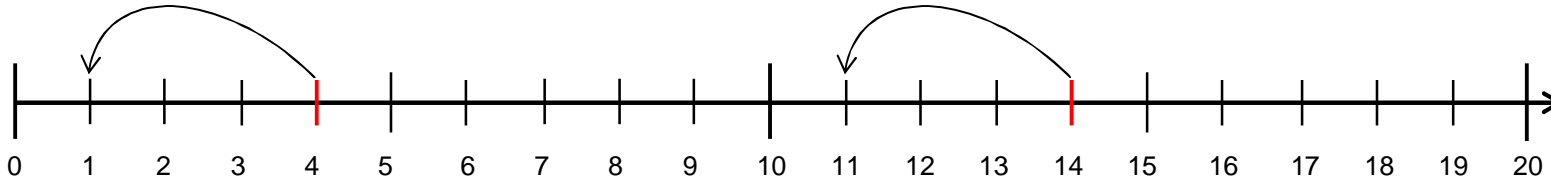
- 3



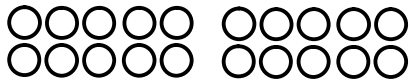
$$\begin{array}{|c|c|c|c|c|c|} \hline 1 & 4 & - & 3 & = & 1 & 1 \\ \hline \end{array}$$



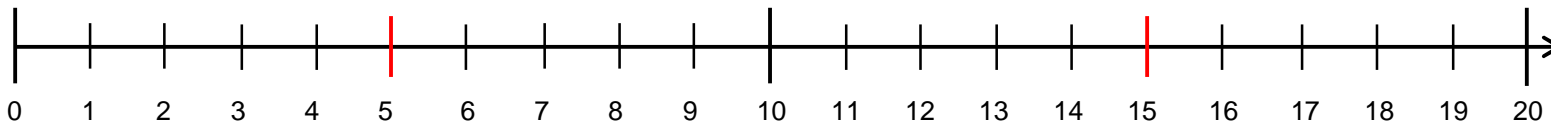
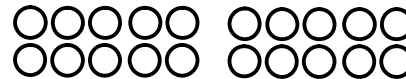
- 3



$$\begin{array}{|c|c|c|c|} \hline 5 & - & 4 & = & \square \\ \hline \end{array}$$



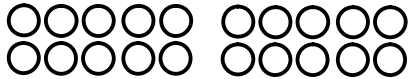
$$\begin{array}{|c|c|c|c|c|c|} \hline 1 & 5 & - & 4 & = & \square & \square \\ \hline \end{array}$$



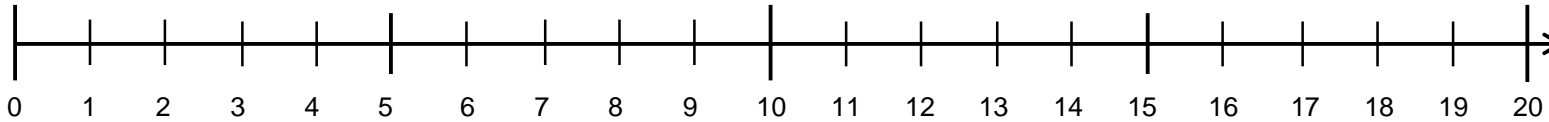
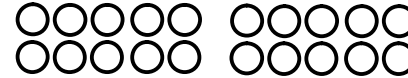
# Subtrahieren bis 20 - „Zwergen- und Riesenaufgaben“




$$\boxed{6} - \boxed{2} = \boxed{\phantom{0}}$$



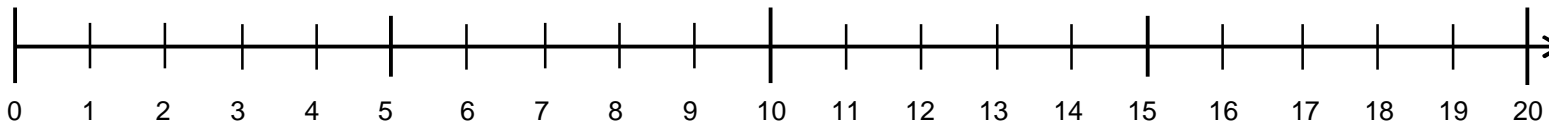
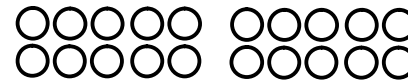
$$\boxed{1} \boxed{6} - \boxed{2} = \boxed{\phantom{0}} \boxed{\phantom{0}}$$



$$\boxed{5} - \boxed{3} = \boxed{\phantom{0}}$$



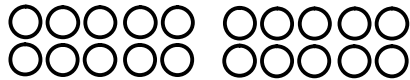
$$\boxed{1} \boxed{5} - \boxed{3} = \boxed{\phantom{0}} \boxed{\phantom{0}}$$



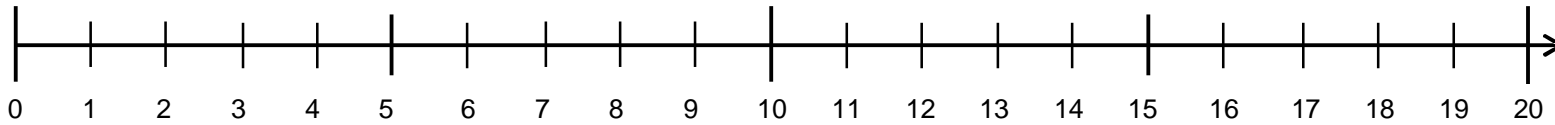
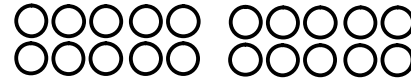
# Subtrahieren bis 20 - „Zwergen- und Riesenaufgaben“



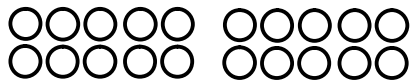
$$\boxed{6} - \boxed{3} = \boxed{\phantom{0}}$$



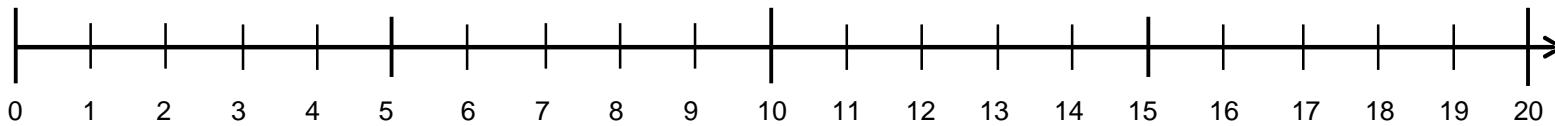
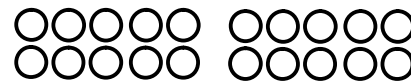
$$\boxed{1} \boxed{6} - \boxed{3} = \boxed{\phantom{0}} \boxed{\phantom{0}}$$



$$\boxed{7} - \boxed{7} = \boxed{\phantom{0}}$$



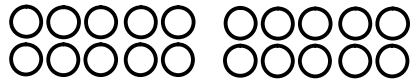
$$\boxed{1} \boxed{7} - \boxed{7} = \boxed{\phantom{0}} \boxed{\phantom{0}}$$



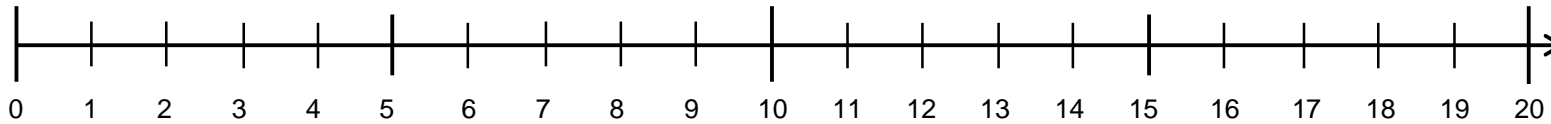
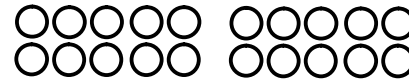
# Subtrahieren bis 20 - „Zwergen- und Riesenaufgaben“



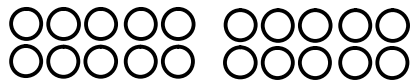
$$\boxed{7} - \boxed{2} = \boxed{\phantom{00}}$$



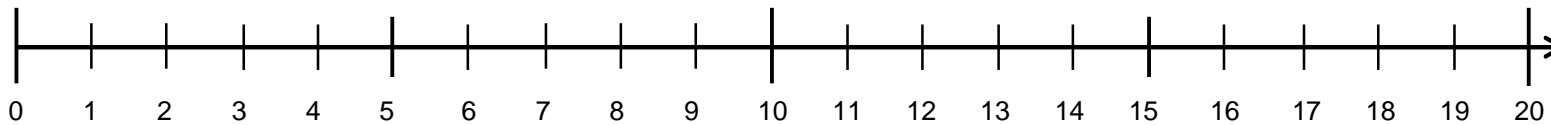
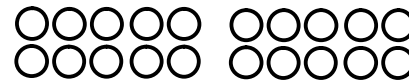
$$\boxed{17} - \boxed{2} = \boxed{\phantom{00}}$$



$$\boxed{8} - \boxed{1} = \boxed{\phantom{00}}$$



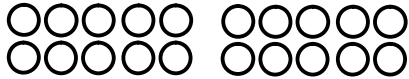
$$\boxed{18} - \boxed{1} = \boxed{\phantom{00}}$$



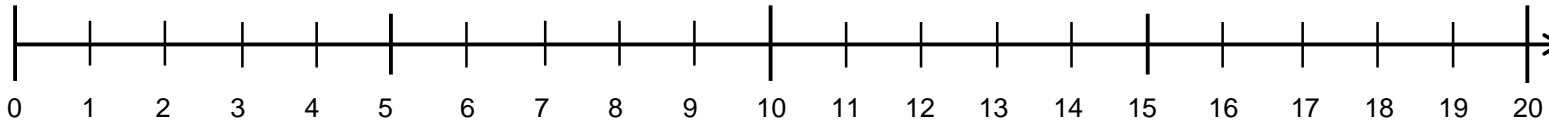
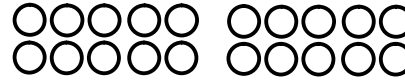
# Subtrahieren bis 20 - „Zwergen- und Riesenaufgaben“



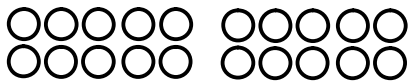
$$\boxed{9} - \boxed{0} = \boxed{\phantom{0}}$$



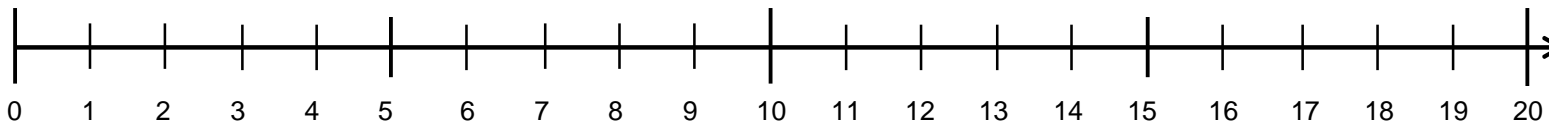
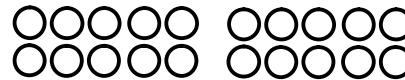
$$\boxed{19} - \boxed{0} = \boxed{\phantom{00}}$$



$$\boxed{7} - \boxed{3} = \boxed{\phantom{0}}$$



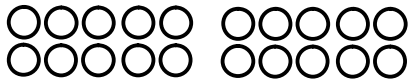
$$\boxed{17} - \boxed{3} = \boxed{\phantom{00}}$$



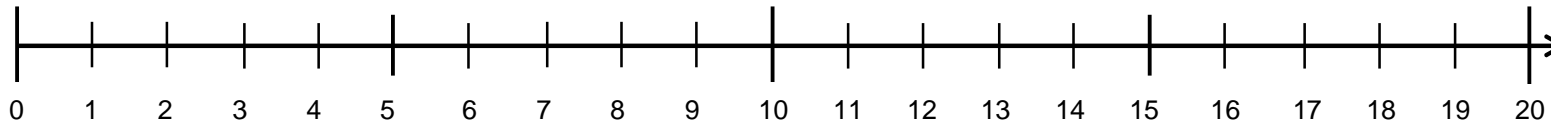
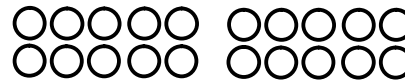
# Subtrahieren bis 20 - „Zwergen- und Riesenaufgaben“




$$\boxed{9} - \boxed{4} = \boxed{\phantom{00}}$$



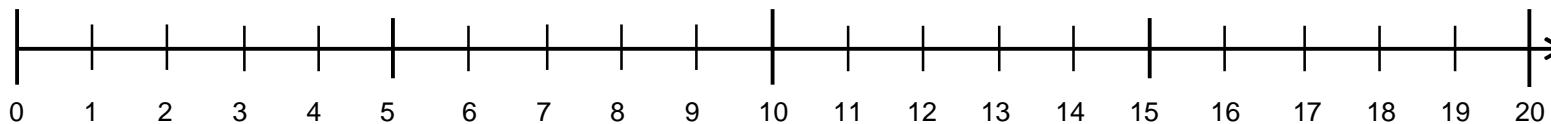
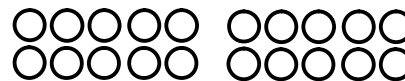
$$\boxed{1} \boxed{9} - \boxed{4} = \boxed{\phantom{00}} \boxed{\phantom{00}}$$



$$\boxed{8} - \boxed{5} = \boxed{\phantom{00}}$$



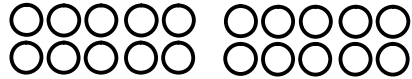
$$\boxed{1} \boxed{8} - \boxed{5} = \boxed{\phantom{00}} \boxed{\phantom{00}}$$



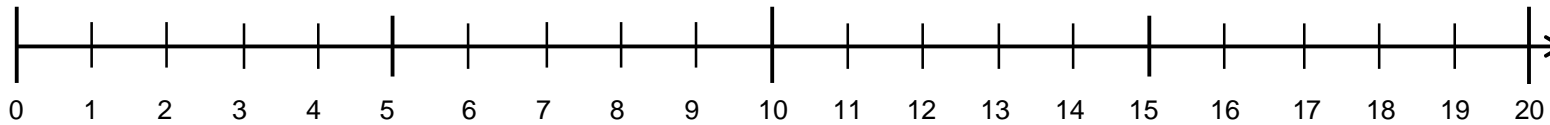
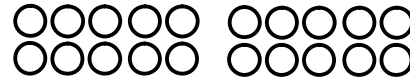
# Subtrahieren bis 20 - „Zwergen- und Riesenaufgaben“



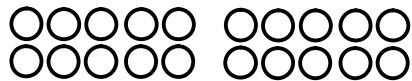
$$\boxed{9} - \boxed{7} = \boxed{\phantom{00}}$$



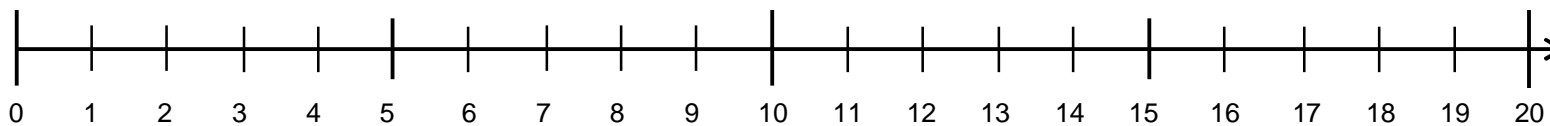
$$\boxed{19} - \boxed{7} = \boxed{\phantom{00}}$$



$$\boxed{10} - \boxed{3} = \boxed{\phantom{00}}$$



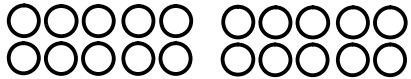
$$\boxed{20} - \boxed{3} = \boxed{\phantom{00}}$$



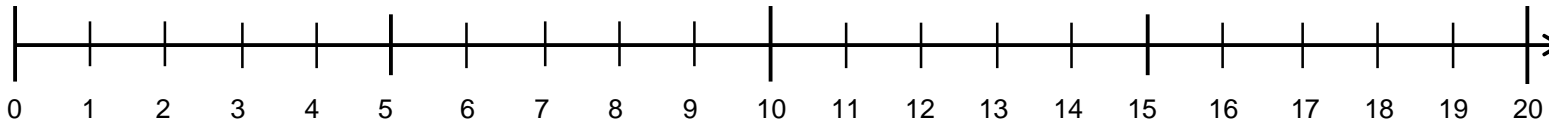
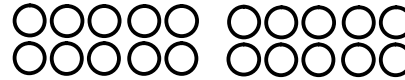
# Subtrahieren bis 20 - „Zwergen- und Riesenaufgaben“



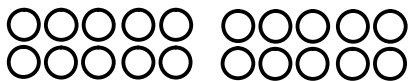
$$\boxed{8} - \boxed{5} = \boxed{\phantom{0}}$$



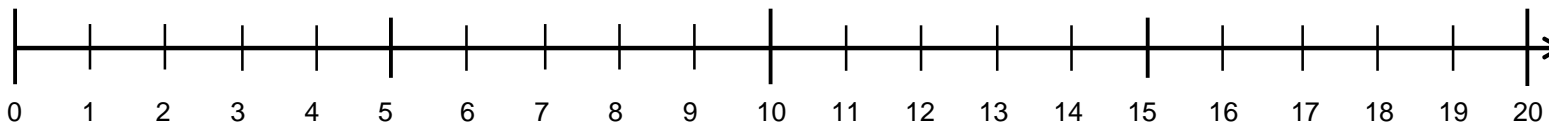
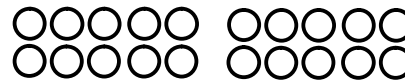
$$\boxed{1} \boxed{8} - \boxed{5} = \boxed{\phantom{0}} \boxed{\phantom{0}}$$



$$\boxed{5} - \boxed{0} = \boxed{\phantom{0}}$$



$$\boxed{1} \boxed{5} - \boxed{0} = \boxed{\phantom{0}} \boxed{\phantom{0}}$$

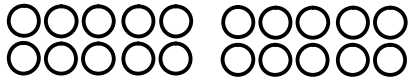




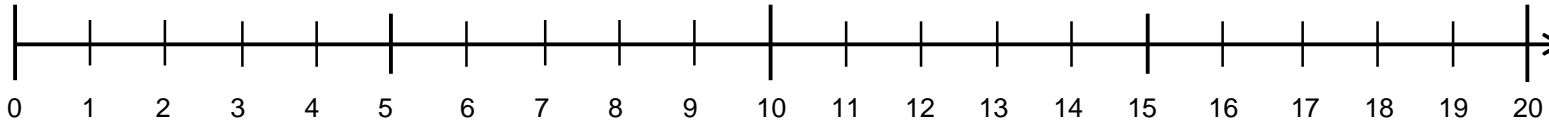
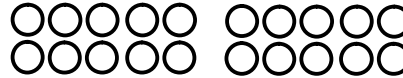
Subtrahieren bis 20 - „Zwergen- und Riesenaufgaben“ Finde die „Riesenaufgabe“ selbständig!



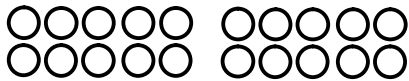
$$\boxed{9} - \boxed{4} = \boxed{\phantom{0}}$$



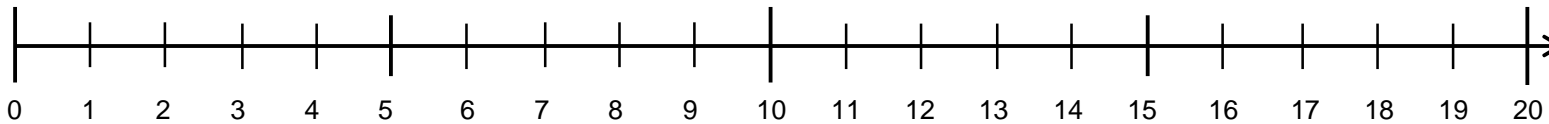
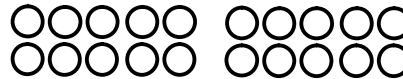
$$\boxed{\phantom{0}} \boxed{\phantom{0}} - \boxed{\phantom{0}} \boxed{\phantom{0}} = \boxed{\phantom{0}} \boxed{\phantom{0}}$$



$$\boxed{7} - \boxed{6} = \boxed{\phantom{0}}$$



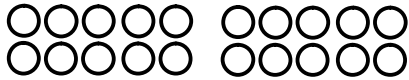
$$\boxed{\phantom{0}} \boxed{\phantom{0}} - \boxed{\phantom{0}} \boxed{\phantom{0}} = \boxed{\phantom{0}} \boxed{\phantom{0}}$$



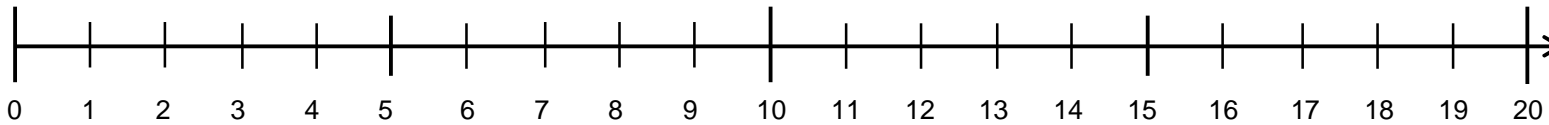
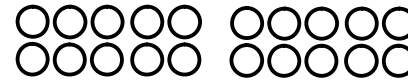
Subtrahieren bis 20 - „Zwergen- und Riesenaufgaben“ Finde die „Zwergenaufgabe“ selbständig!



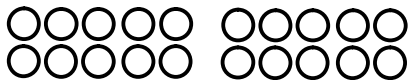
	-		=	
--	---	--	---	--



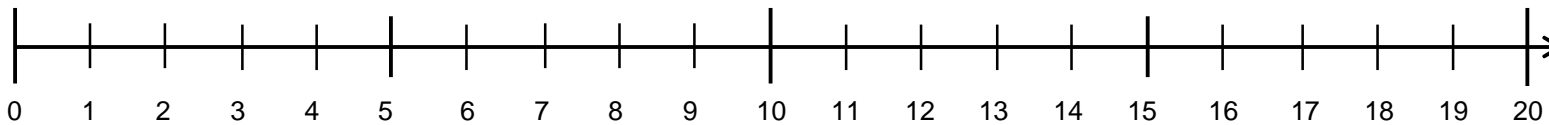
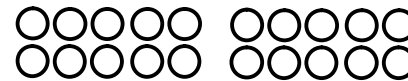
1	8	-	7	=		
---	---	---	---	---	--	--



	-		=	
--	---	--	---	--



1	7	-	4	=		
---	---	---	---	---	--	--

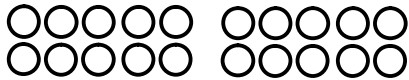


# Subtrahieren bis 20 - „Zwergen- und Riesenaufgaben“

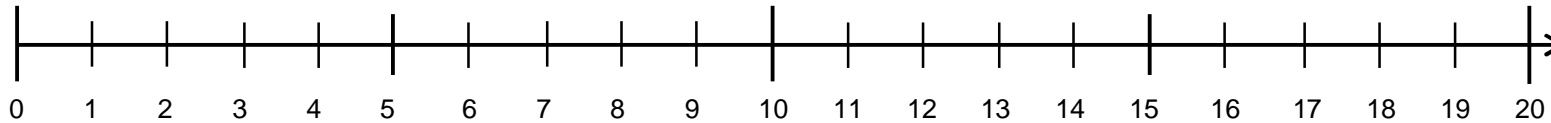
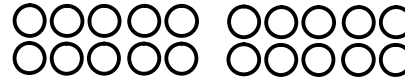
(Kopiervorlage 1)



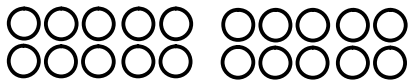
$$\square - \square = \square$$



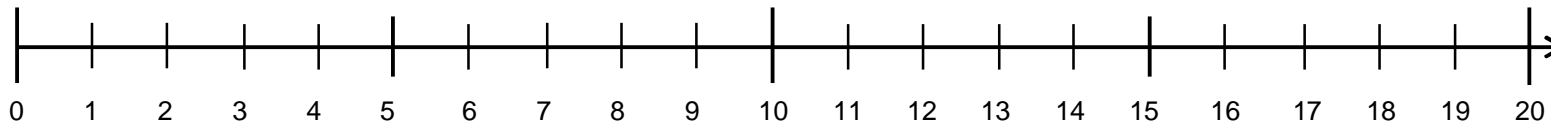
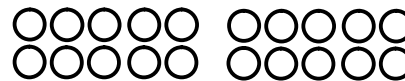
$$\square - \square = \square$$



$$\square - \square = \square$$



$$\square - \square = \square$$

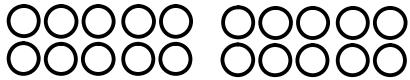


# Subtrahieren bis 20 - „Zwergen- und Riesenaufgaben“

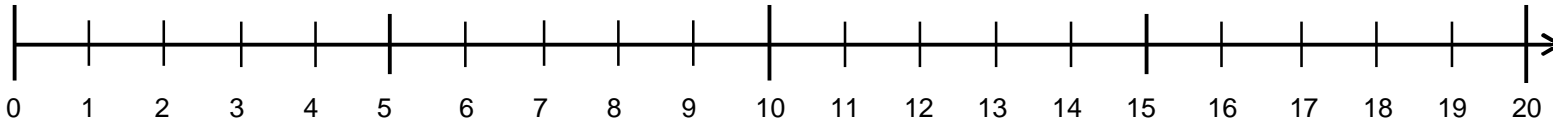
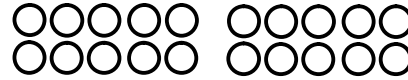
(Kopiervorlage 2)



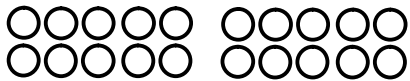
	-		=	
--	---	--	---	--



		-		=		
--	--	---	--	---	--	--



		-		=	
--	--	---	--	---	--



		-		=		
--	--	---	--	---	--	--

