


Dividieren

Welche Drachen kannst Du durch 7 teilen ?
Schreibe die Rechnung daneben.




$$21 : 7 = 3$$




$$_ : _ = _$$



$$_ : _ = _$$



$$_ : _ = _$$



$$_ : _ = _$$



$$_ : _ = _$$



$$_ : _ = _$$



$$_ : _ = _$$



$$_ : _ = _$$



$$_ : _ = _$$




$$_ : _ = _$$




$$_ : _ = _$$

Dividieren (Kopiervorlage)


Welche Drachen kannst Du durch ___ teilen ?
Schreibe die Rechnung daneben.




___ : ___ = ___




___ : ___ = ___



___ : ___ = ___



___ : ___ = ___



___ : ___ = ___



___ : ___ = ___



___ : ___ = ___




___ : ___ = ___



___ : ___ = ___



___ : ___ = ___



___ : ___ = ___



___ : ___ = ___